



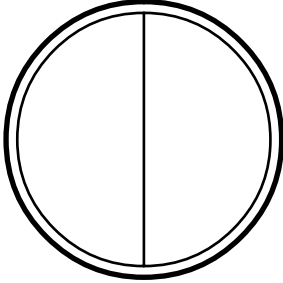
All You Knead is Love

Activity Sheet

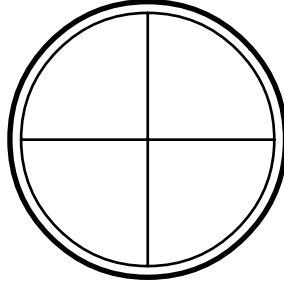
Name: _____ Class: _____

Answer the following questions by shading parts of the cakes.

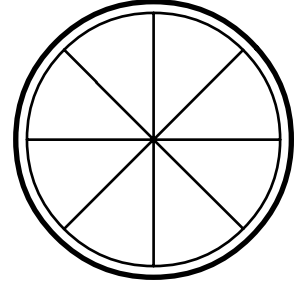
- 1 Shade $\frac{1}{2}$ of Stig's cake



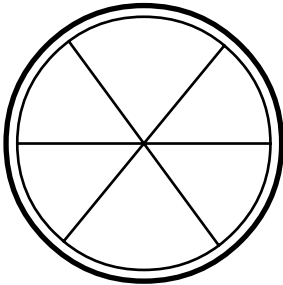
- 2 Shade $\frac{1}{2}$ of Stig's cake



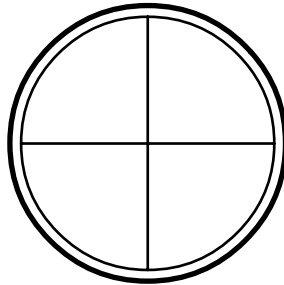
- 3 Shade $\frac{1}{2}$ of Stig's cake



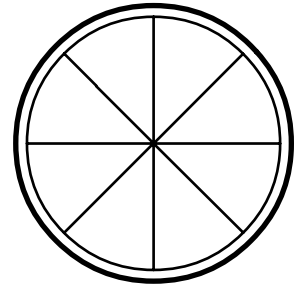
- 4 Shade $\frac{1}{2}$ of Stig's cake



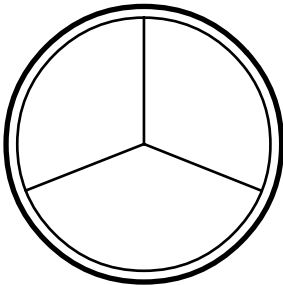
- 5 Shade $\frac{1}{4}$ of Stig's cake



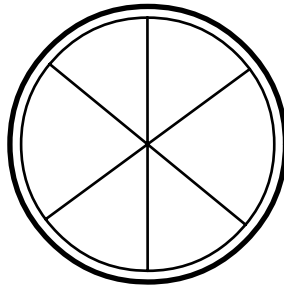
- 6 Shade $\frac{1}{4}$ of Stig's cake



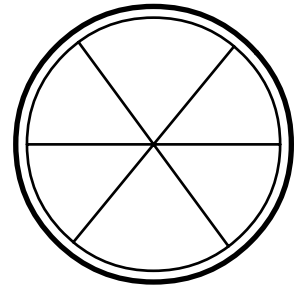
- 7 Shade $\frac{1}{3}$ of Stig's cake



- 8 Shade $\frac{1}{3}$ of Stig's cake



- 9 Shade $\frac{2}{3}$ of Stig's cake



- 10 Shade $\frac{3}{4}$ of Stig's cake

